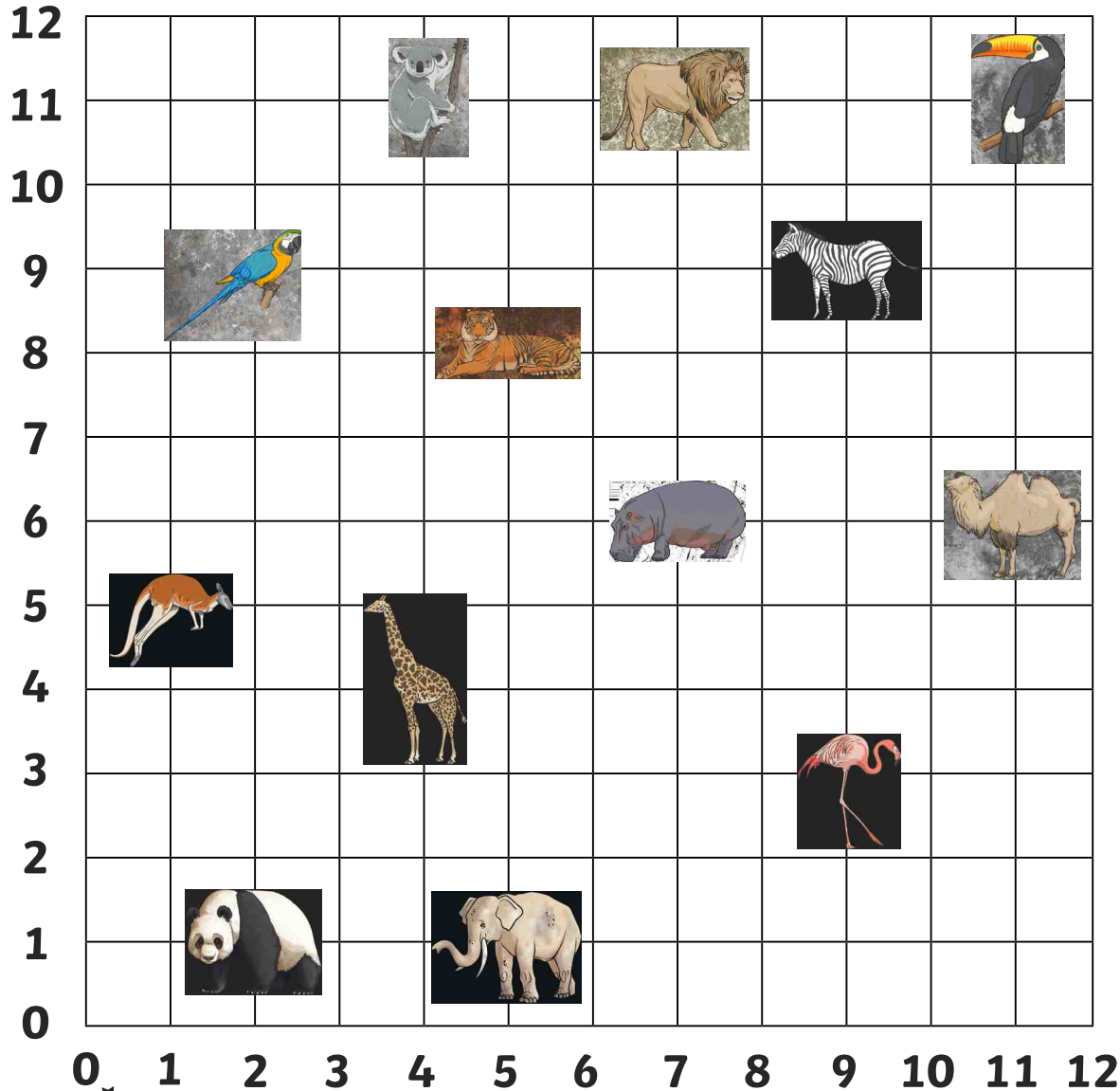


# Zoo Coordinates

Which zoo animal is at the following coordinates?



$(7,11) =$  \_\_\_\_\_  $(7,6) =$  \_\_\_\_\_

$(2,1) =$  \_\_\_\_\_  $(11,6) =$  \_\_\_\_\_

$(11,11) =$  \_\_\_\_\_  $(1,5) =$  \_\_\_\_\_


$(9,3) =$  \_\_\_\_\_  $(9,9) =$  \_\_\_\_\_

$(4,11) =$  \_\_\_\_\_  $(5,8) =$  \_\_\_\_\_

parrot	kangaroo	panda
koala	tiger	giraffe
elephant	flamingo	hippo
camel	zebra	lion
toucan		



# Zoo Coordinates



Write the coordinates for the zoo animals:



= ( , )



= ( , )



= ( , )



= ( , )



= ( , )



= ( , )



= ( , )



= ( , )



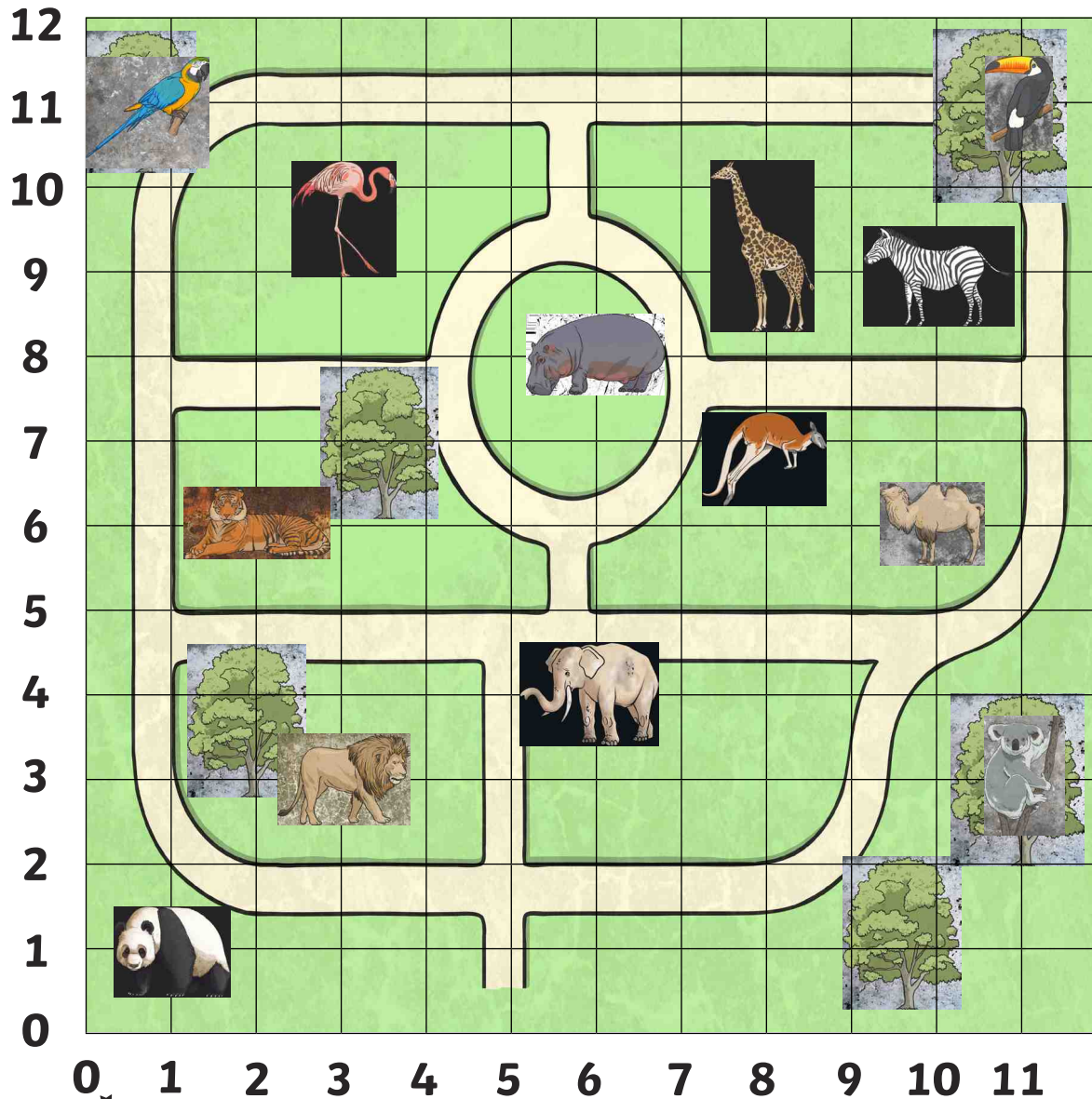
= ( , )



= ( , )



# Zoo Coordinates



Which animal is at these coordinates on the zoo map?

(11,11) = \_\_\_\_\_

(2,6) = \_\_\_\_\_

(6,8) = \_\_\_\_\_

(3,10) = \_\_\_\_\_

(11,3) = \_\_\_\_\_

(1,1) = \_\_\_\_\_

Write the coordinates of these animals on the zoo map:



= \_\_\_\_\_




= \_\_\_\_\_



= \_\_\_\_\_



= \_\_\_\_\_



= \_\_\_\_\_



= \_\_\_\_\_

Draw your own zoo animals at these coordinates on the map:

(6,1)

(2,9)

(7,3)

(8,3)

(8,6)











(11,1)

# Zoo Coordinates - Answers



- (7,11) = lion
- (2,1) = panda
- (11,11) = toucan
- (9,3) = flamingo
- (4,11) = koala
- (7,6) = hippo
- (11,6) = camel
- (1,5) = kangaroo
- (9,9) = zebra
- (5,8) = tiger









- |   |           |   |          |
|---|-----------|---|----------|
|    | = (3,11)  |    | = (4,4)  |
|    | = (7,10)  |    | = (1,6)  |
|    | = (10,11) |    | = (7,4)  |
|   | = (1,10)  |   | = (11,5) |
|  | = (5,8)   |  | = (11,1) |



Which animal is at these coordinates on the zoo map?

- |                  |                   |
|------------------|-------------------|
| (11,11) = toucan | (2,6) = tiger     |
| (6,8) = hippo    | (3,10) = flamingo |
| (11,3) = koala   | (1,1) = panda     |

Write the coordinates of these animals on the zoo map:

- |   |          |   |          |
|---|----------|---|----------|
|   | = (1,11) |    | = (6,4)  |
|  | = (3,3)  |  | = (10,6) |
|  | = (10,9) |  | = (8,7)  |